

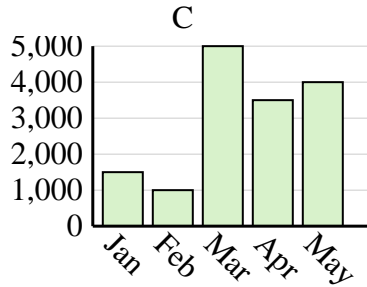
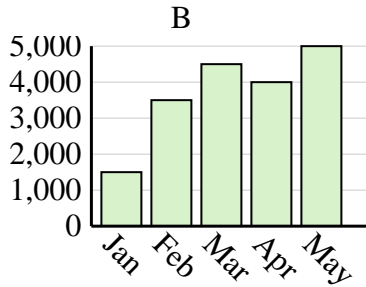
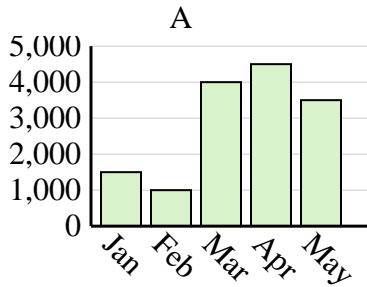


Determine which graph (A, B or C) best represents the information in the table.

Answers

1)

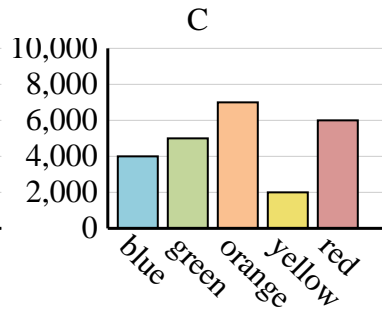
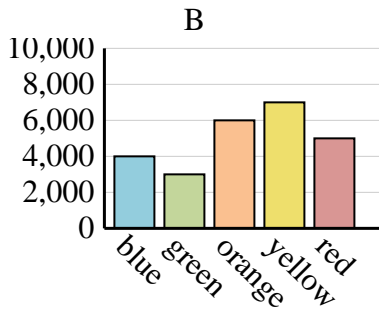
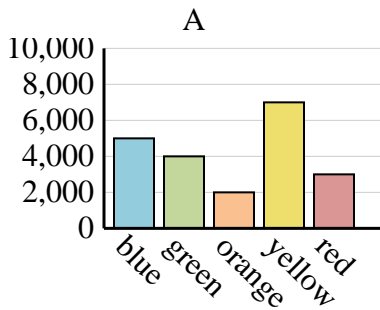
Sales	Jan	Feb	Mar	Apr	May
Month	1,500	1,000	4,000	4,500	3,500



1. \_\_\_\_\_
2. \_\_\_\_\_
3. \_\_\_\_\_
4. \_\_\_\_\_

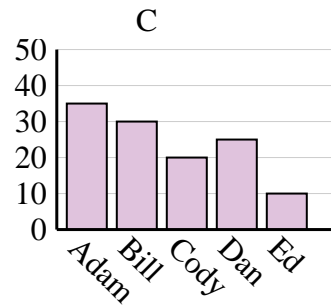
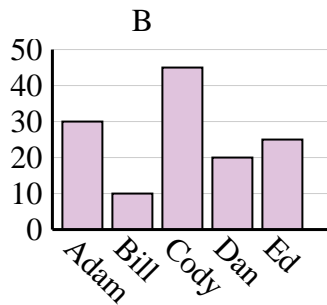
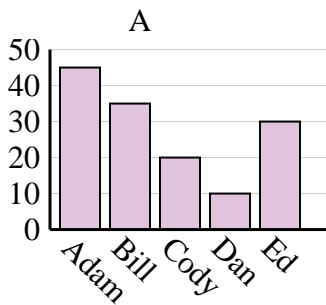
2)

Favorite Color	blue	green	orange	yellow	red
People	4,000	3,000	6,000	7,000	5,000



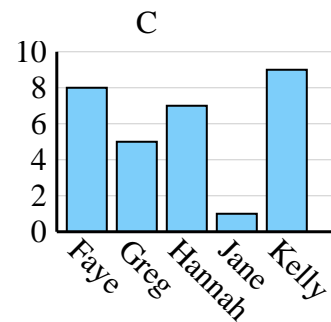
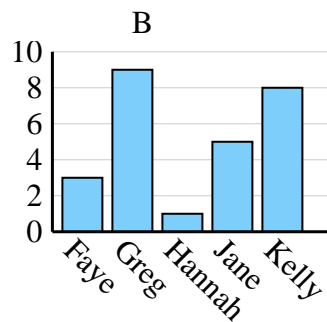
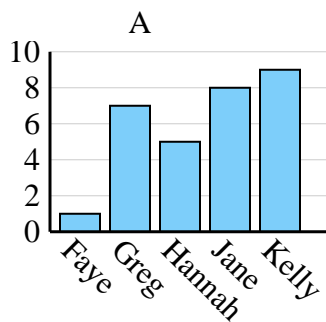
3)

Name	Adam	Bill	Cody	Dan	Ed
Points	35	30	20	25	10



4)

Name	Faye	Greg	Hannah	Jane	Kelly
States Lived In	1	7	5	8	9



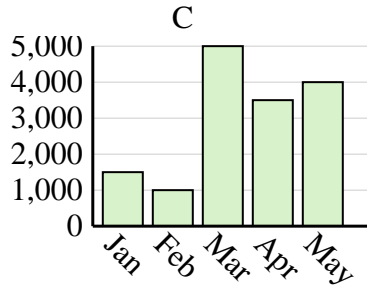
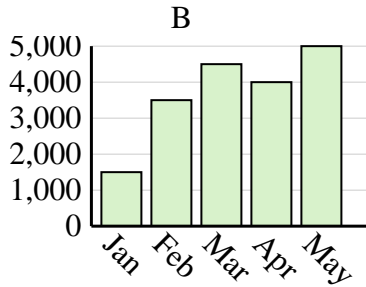
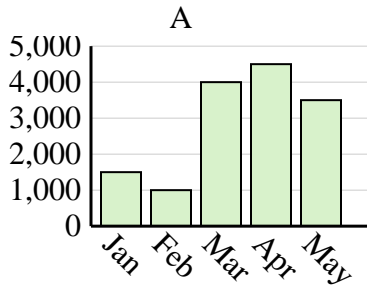


Determine which graph (A, B or C) best represents the information in the table.

Answers

1)

Sales	Jan	Feb	Mar	Apr	May
Month	1,500	1,000	4,000	4,500	3,500



1. **A**

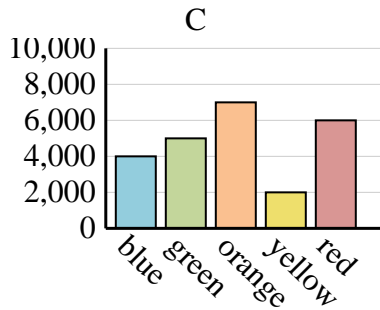
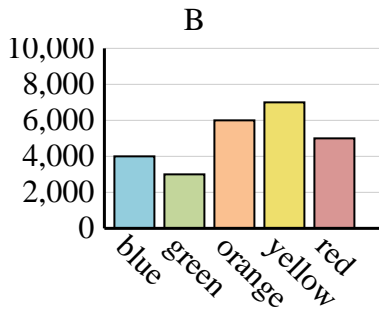
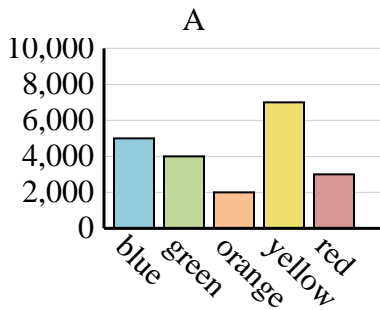
2. **B**

3. **C**

4. **A**

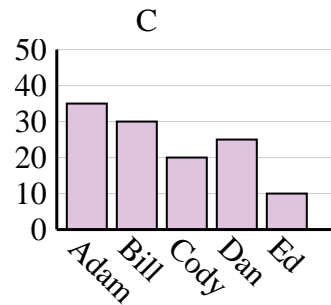
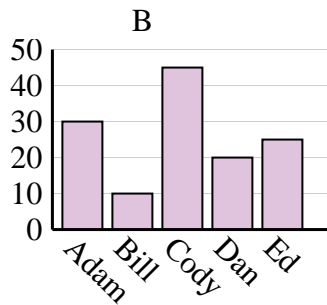
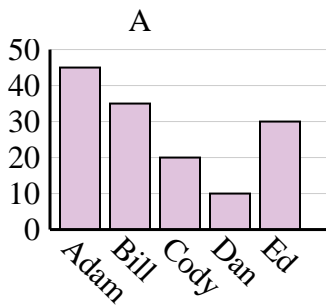
2)

Favorite Color	blue	green	orange	yellow	red
People	4,000	3,000	6,000	7,000	5,000



3)

Name	Adam	Bill	Cody	Dan	Ed
Points	35	30	20	25	10



4)

Name	Faye	Greg	Hannah	Jane	Kelly
States Lived In	1	7	5	8	9

